

University of Science and Technology
Faculty of Computer Science and Information Technology
Computer Science Department
Third Year: Final Exam
Subject: Discrete Mathematics

Date 20/05/2018

Exam Time: 3 Hours

Answer All Questions

Question (1): (15 Marks)

- 1- An algorithm is a of instructions solving a problem.
- 2- There are several properties that algorithms generally share. These properties include:.....,, and
- 3- A on a set A is a subset of $A \times A$.
- 4- A relation R on a set A is called if $(a, a) \in R$ for every element $a \in A$.
- 5- A relation R on a set A is called *transitive* if whenever $(a, b) \in R$ and $(b, c) \in R$, then, for all $a, b, c \in A$.
- 6- The operation is used to combine two tables into one when these tables share some identical fields.
- 7- A graph in which each edge connects two different vertices and where no two edges connect the same pair of vertices is called a graph.
- 8- Two vertices u and v in an undirected graph G are called if u and v are endpoints of an edge e of G .
- 9- The of a vertex in an undirected graph is the number of edges incident with it.
- 10- A graph on n vertices, denoted by K_n , is a simple graph that contains exactly one edge between each pair of distinct vertices.
- 11- A is a tree in which one vertex has been designated as the root and every edge is directed away from the root.
- 12- A tree with n vertices has..... edges.
- 13- An in a graph G is a simple circuit containing every edge of G .
- 14- A simple path in a graph G that passes through every vertex exactly once is called a

Question (2) (19 Marks)

Solve the following problems (Algorithms and Counting)

- 1- Show that $f(x) = x^2 + 2x + 1$ is $O(x^2)$. (3 Marks)
 - 2- Show that $n!$ is $O(n^n)$ and that implies $\log n!$ is $O(n \log n)$? (4 Marks)
 - 3- How many different bit strings of length seven are there? (2 Marks)
 - 4- How many bit strings of length eight either start with a 1 bit OR end with the two bits 00? (3 Marks)
 - 5- A multiple-choice test contains 10 questions. There are four possible answers for each question. In how many ways can a student answer the questions on the test if the student answers every question? (3 Marks)
 - 6- How many strings of eight uppercase English letters are there (4 Marks)
 - a) if letters can be repeated?
 - b) if no letter can be repeated?
-

Question (3) (21 Marks)

Solve the following problems (Permutation and Combination)

- 1- In how many ways can we select three students from a group of five students to stand in line for a picture? (3 Marks)
 - 2- How many ways are there to select five players from a 10-member tennis team to make a trip to a match at another school? (3 Marks)
 - 3- How many bit strings of length 10 contain (6 Marks)
 - a) exactly four 1s?
 - b) at most four 1s?
 - c) at least four 1s?
 - 4- Suppose that a department contains 10 men and 15 women. How many ways are there to form a committee with six members if it **must** have the same number of men and women? (3 Marks)
 - 5- Find the expansion of $(x + y)^6$. (3 Marks)
 - 6- What is the coefficient of x^8y^9 in the expansion of $(3x + 2y)^{17}$? (3 Marks)
-

Question (4) (15 Marks)

Solve the following problems (Relations)

- 1- Let R be the relation $\{(1, 2), (1, 3), (2, 3), (2, 4), (3, 1)\}$, and let S be the relation $\{(2, 1), (3, 1), (3, 2), (4, 2)\}$. Find $S \circ R$? (3 Marks)
- 2- What do you obtain when you apply the selection operator s_C , where C is the condition $Destination = Detroit$, to the database in Table 8? (3 Marks)

3- Display the table produced by applying the projection $P_{1,4}$ to Table 8? (3 Marks)

TABLE 8 Flights.				
<i>Airline</i>	<i>Flight_number</i>	<i>Gate</i>	<i>Destination</i>	<i>Departure_time</i>
Nadir	122	34	Detroit	08:10
Acme	221	22	Denver	08:17
Acme	122	33	Anchorage	08:22
Acme	323	34	Honolulu	08:30
Nadir	199	13	Detroit	08:47
Acme	222	22	Denver	09:10
Nadir	322	34	Detroit	09:44

4- Suppose that the relations R_1 and R_2 on a set A are represented by the matrices

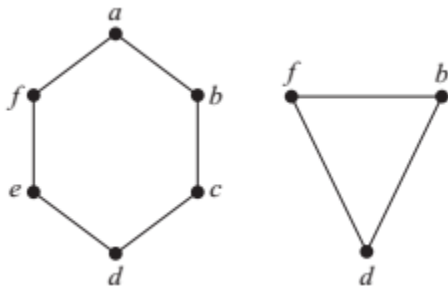
$$\mathbf{M}_{R_1} = \begin{bmatrix} 1 & 0 & 1 \\ 1 & 0 & 0 \\ 0 & 1 & 0 \end{bmatrix} \quad \text{and} \quad \mathbf{M}_{R_2} = \begin{bmatrix} 1 & 0 & 1 \\ 0 & 1 & 1 \\ 1 & 0 & 0 \end{bmatrix}.$$

What are the matrices representing $R_1 \cup R_2$ and $R_1 \cap R_2$? (6 Marks)

Question (5) (30 Marks)

Solve the following problems (Graphs)

- 1- How many edges are there in a graph with 10 vertices each vertex is of degree 6? (2 Marks)
- 2- Draw the graphs K_3 , $K_{3,3}$? (4 Marks)
- 3- Find the union of the given pair of simple graphs? (4 Marks)



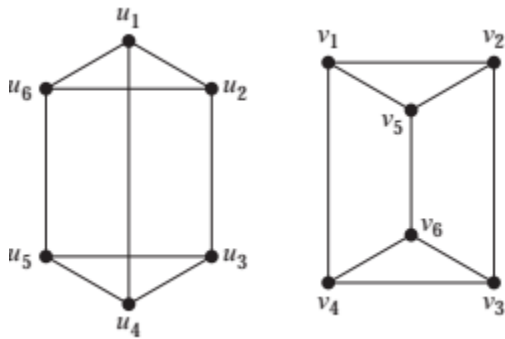
- 4- The complementary graph G^c of a simple graph G has the same vertices as G . Two vertices are adjacent in G^c if and only if they are not adjacent in G . Draw G^c for the following graph G ? (5 Marks)



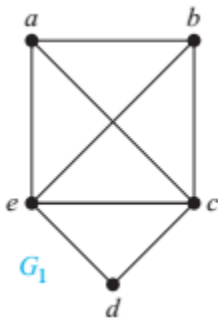
- 5- Draw a graph with the given adjacency matrix? (4 Marks)

$$\begin{bmatrix} 0 & 0 & 1 & 1 \\ 0 & 0 & 1 & 0 \\ 1 & 1 & 0 & 1 \\ 1 & 1 & 1 & 0 \end{bmatrix}$$

- 6- Determine whether the given pair of graphs is isomorphic? (5 Marks)



- 7- Determine whether the given graph has an **Euler circuit**, **Euler Path**, **Hamilton circuit** or **Hamilton Path**? (6 Marks)



END